



INDIAN SCHOOL AL WADI AL KABIR

DEPARTMENT OF MATHEMATICS (2022-2023)

TOPIC: GEOMETRY

RECALL WORKSHEET

RESOURCE PERSON: MS. JYOTI SINGH

NAME: _____ CLASS: IV SEC: _____ DATE: _____

I. Use the words given below to name each shape.



CUBE CONE SPHERE CYLINDER

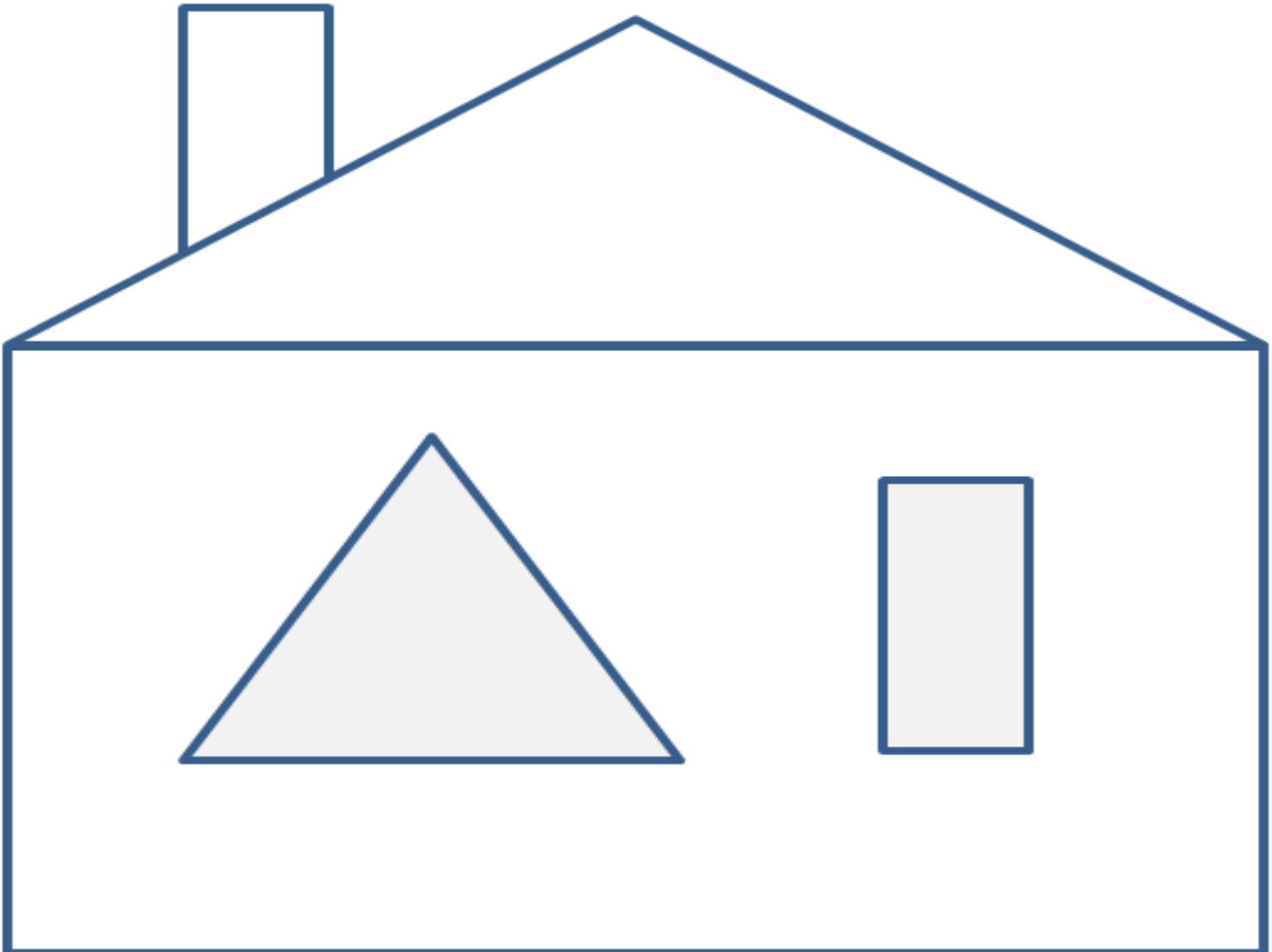


II. Observe the given image and count

a. **NO. OF STANDING / VERTICAL LINES:** _____

b. **NO. OF SLEEPING / HORIZONTAL LINES:** _____

c. **NO. OF SLANTING LINES:** _____





INDIAN SCHOOL AL WADI AL KABIR

DEPARTMENT OF MATHEMATICS (2022-2023)

TOPIC: MULTIPLICATION

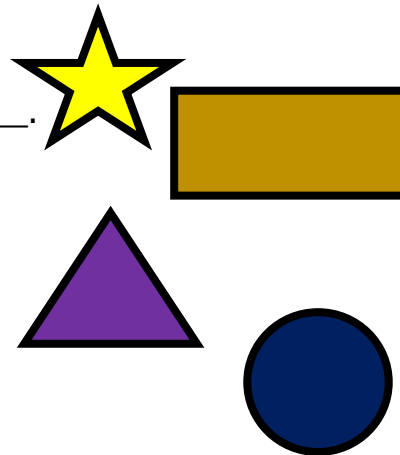
REVISION WORKSHEET

RESOURCE PERSON: MS. JYOTI SINGH

NAME: _____ CLASS: IV SEC: _____ DATE: _____

I. Fill in the blanks with the correct answer.

- a. The closed round shape which has a curved side is _____.
- b. A _____ is a part of a line.
- c. A five-sided Polygon is called a _____.
- d. The length around a circle is its _____.
- e. A _____ extends endlessly on both sides.
- f. _____ is a special quadrilateral which has opposite sides equal.



II. Measure the line segments given below. (Use a ruler)

- a.  LENGTH: _____ cm
- b.  LENGTH: _____ cm

III. Find the radii of the circles with the following diameters. (Radius = $D \div 2$)

a. 12 cm

b. 16 cm

IV. Find the diameters of the circles with the following radii.

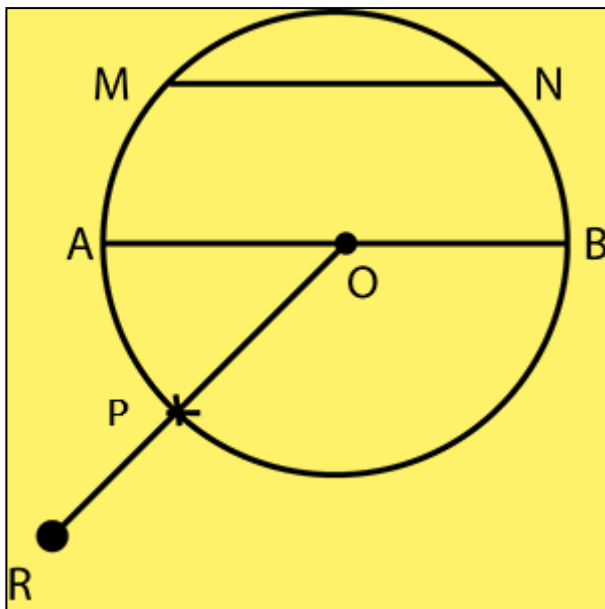
(Diameter = Radius X 2)

a. 5 cm

b. 7 cm



V. In the given circle name the following.



CENTRE: _____

A RADIUS: _____

A DIAMETER: _____

LINE SEGMENT OP:

LINE SEGMENT AB:

